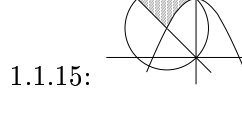
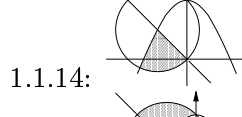
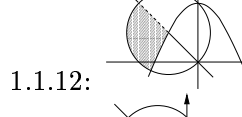
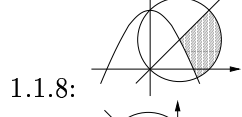
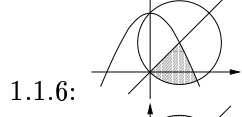
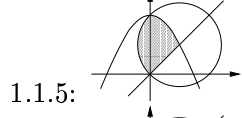
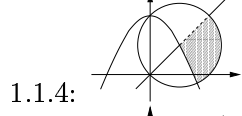
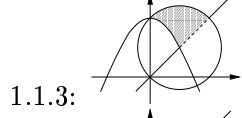
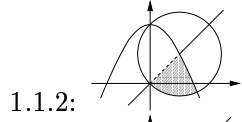
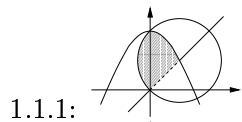
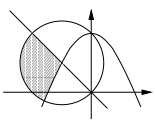


Domanda 1.1: Le soluzioni del sistema $\begin{cases} y > x \\ (x - 1)^2 + (y - 1)^2 \leq 2 \\ y \leq -x^2 + 2 \end{cases}$ sono rappresentate da

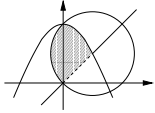


1.1.16:

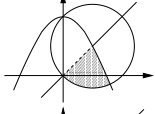


Domanda 1.2: ioni del sistema $\begin{cases} y > -x \\ (x + 1)^2 + (y - 1)^2 \leq 2 \\ y \leq -x^2 + 2 \end{cases}$ sono rappresentate da

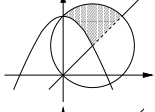
1.2.1:



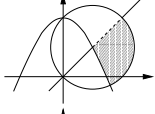
1.2.2:



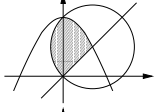
1.2.3:



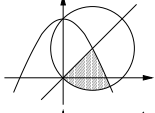
1.2.4:



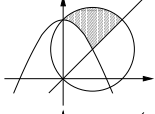
1.2.5:



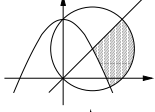
1.2.6:



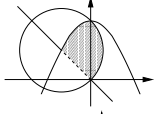
1.2.7:



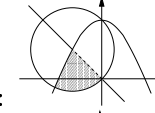
1.2.8:



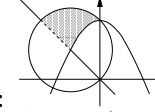
1.2.9:



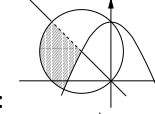
1.2.10:



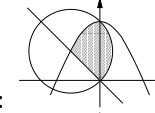
1.2.11:



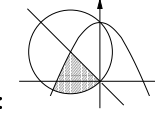
1.2.12:



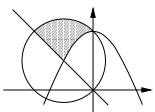
1.2.13:



1.2.14:



1.2.15:



1.2.16:

